

1?



DET SORTE FÅR
THE BLACK SHEEP

Hvilket ansigt skiller sig ud?

Which face stands out?

1X



DET SORTE FÅR
THE BLACK SHEEP

A



B



C



D



2?



DET SORTE FÅR
THE BLACK SHEEP

**Der var engang...
Men hvem skrev hvad?
Et eventyr skiller sig ud.**

**Once upon a time...
But who wrote what?
One fairytale stands out.**


2X



DET SORTE FÅR
THE BLACK SHEEP



DEN LILLE HAVFRUE
THE LITTLE MERMAID



SNEDRONNINGEN
THE SNOW QUEEN



TOMMELISE
THUMBELINA



RØDHÆTTE
RED RIDING HOOD

3?



**DET SORTE FÅR
THE BLACK SHEEP**

**Numrene på disse fly er kædet sammen med deres destinationer. Hvilket fly skiller sig ud?
Det har noget at gøre med initialerne.**

**The numbers of these aircraft are linked to their destinations. Which plane stands out?
It has something to do with the initials.**


3X



DET SORTE FÅR
THE BLACK SHEEP




FLY 008 TIL HONG KONG
FLIGHT 008 TO HONG KONG



FLY 016 TIL PARIS
FLIGHT 016 TO PARIS



FLY 011 TIL LONDON
FLIGHT 011 TO LONDON



FLY 002 TIL BONN
FLIGHT 002 TO BONN

4?



DET SORTE FÅR
THE BLACK SHEEP

Hvilket ord kan man sætte foran disse ord?

hus
ferie
tid

Which word can be put in front of these words?

flower
rise
screen

4X



DET SORTE FÅR
THE BLACK SHEEP

A

Drømme
Dream

B

Sol
Sun

C

Sommer
Summer


D

Vandre
Hiking

5?



DET SORTE FÅR
THE BLACK SHEEP



Hvor mange små terninger er der i denne stak af terninger? Antag at alle rækker og kolonner er komplette, med mindre du kan se dem slutte.

How many small cubes are there in this stack? Assume that all rows and columns are complete, unless you can see them end.

5X



DET SORTE FÅR
THE BLACK SHEEP

A

40

B

44

C

49

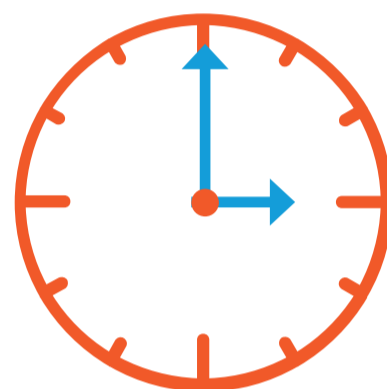
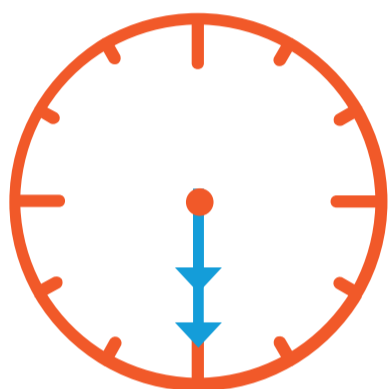
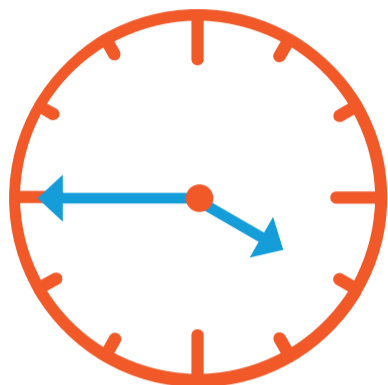
D

52

6?



DET SORTE FÅR
THE BLACK SHEEP



Hvor skal den anden viser stå på
det nederste ur?


Where should the other
pointer be on the last clock?

6X




DET SORTE FÅR
THE BLACK SHEEP

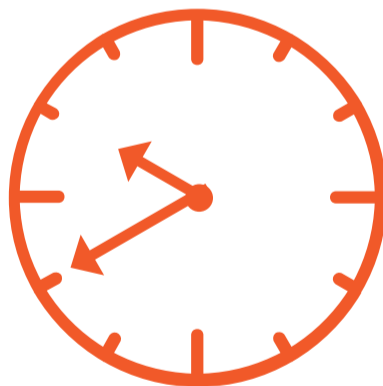
A



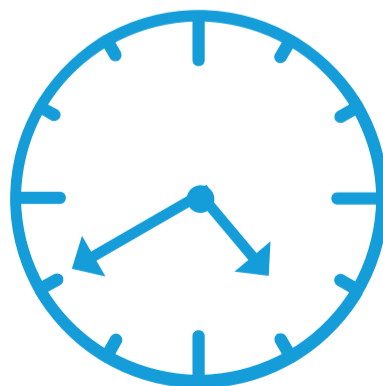
B



C



D



7?



DET SORTE FÅR
THE BLACK SHEEP

B

F

K

Q

?

Hvilket bogstav fortsætter rækken?

Which letter should be next?



A



B



C




D



8?



DET SORTE FÅR
THE BLACK SHEEP

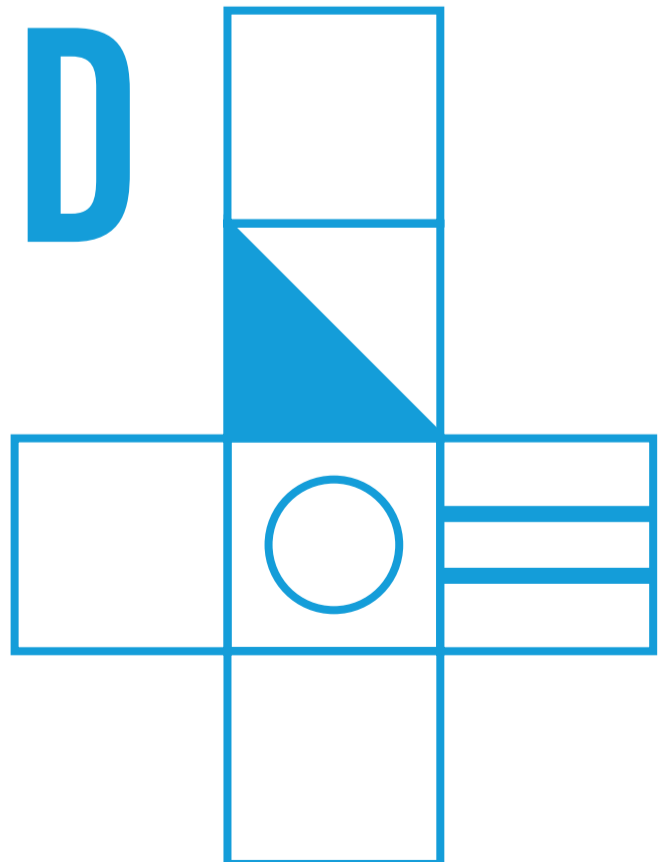
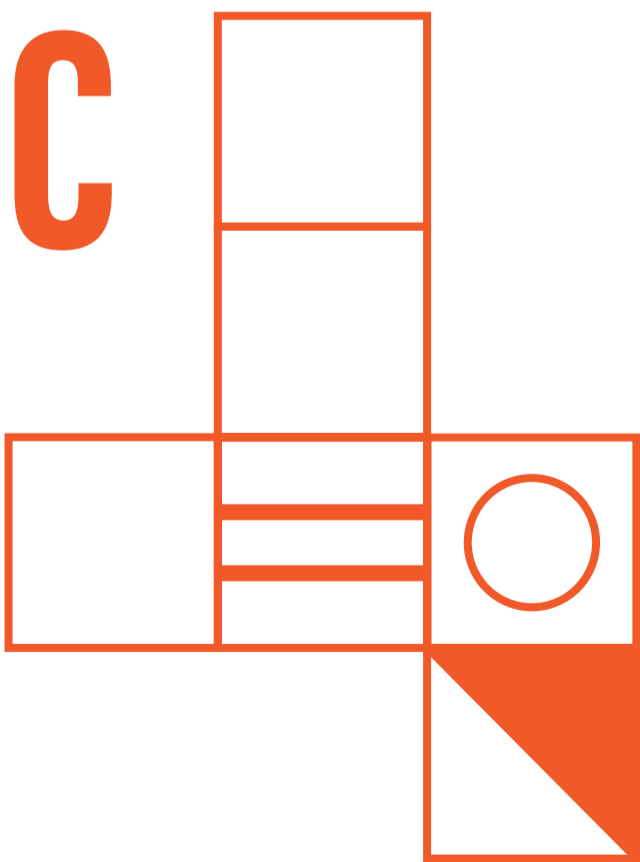
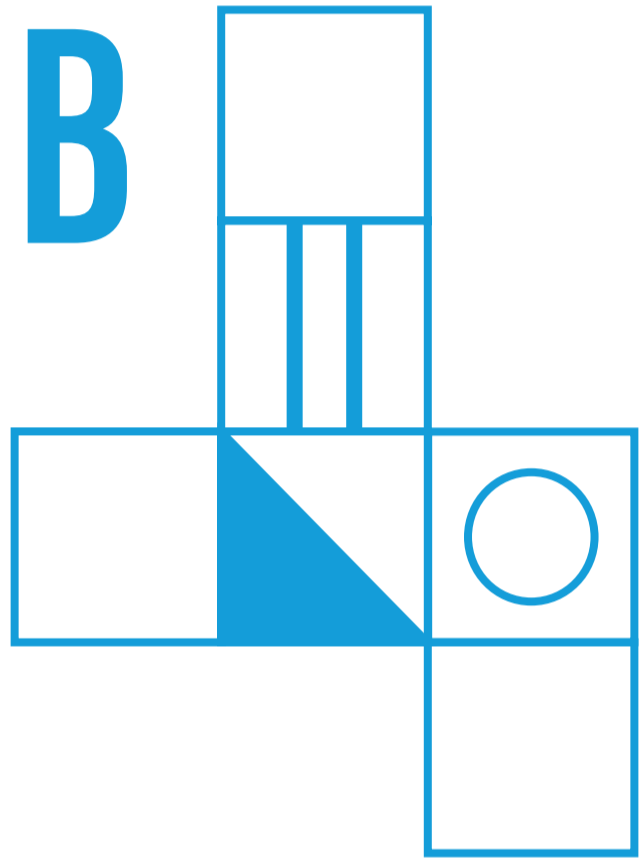
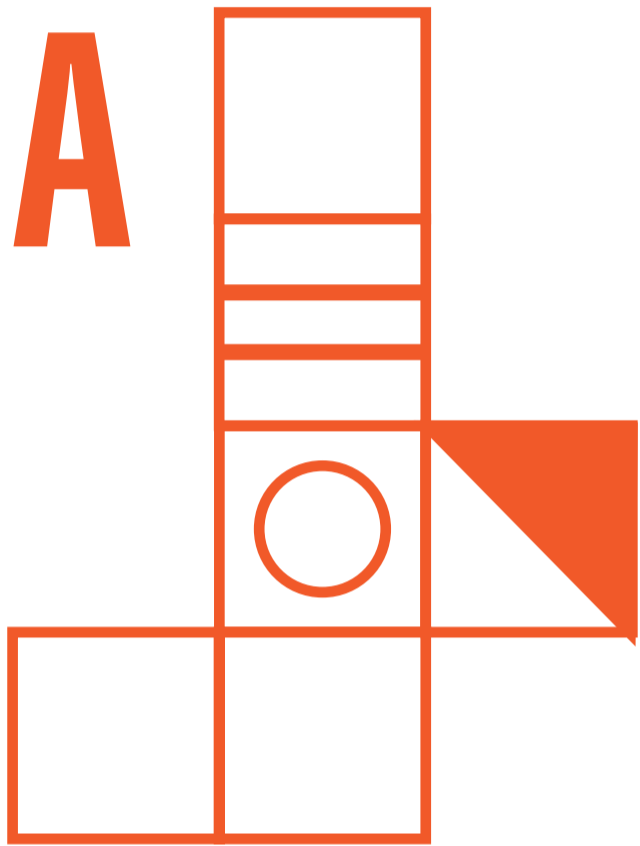


Kassen ovenfor er foldet af en af de viste skabeloner. Hvilken er den korrekte?

The box above is made from one of the listed templates. Which is the correct one?

8X

DET SORTE FÅR
THE BLACK SHEEP



9?



DET SORTE FÅR
THE BLACK SHEEP

**Et ord passer ikke ind i
sammenhængen. Hvilket?**

**Which word does not match
the others?**

9X



DET SORTE FÅR
THE BLACK SHEEP

A

Calcium
Calcium

B

Vitamin
Vitamin

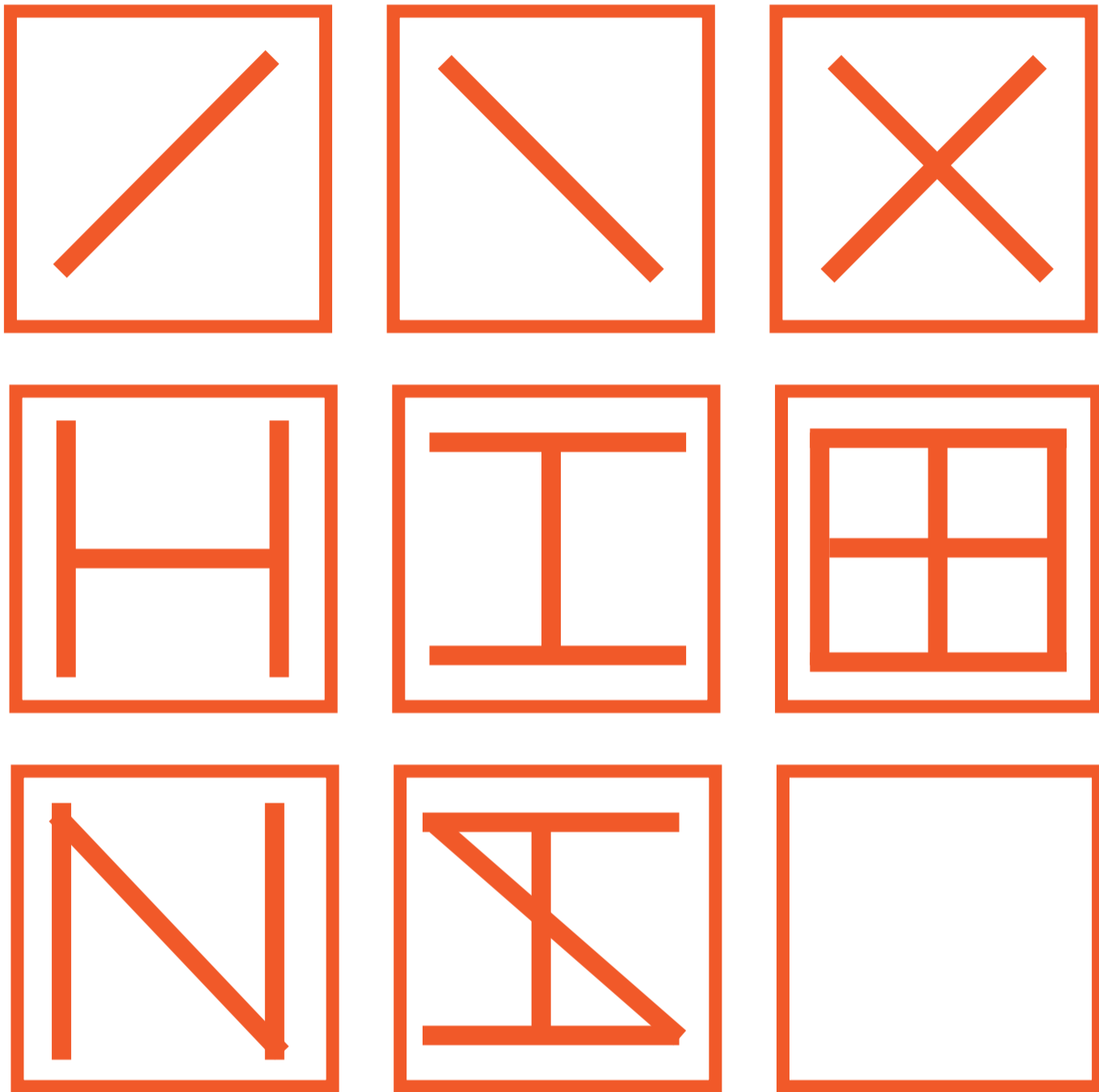
C

Kalium
Potassium

D

Magnesium
Magnesium

10?



Hvilket mønster færdiggør opgaven?

What pattern should be in the last box?

10X




DET SORTE FÅR
THE BLACK SHEEP

A




B



C



D



LØSNING

SOLUTION

1

D = Han er den eneste med hat

D = He is the only one with hat

2

D = Skrevet af Bdr. Grimm. De øvrige er H. C. Andersen

D = By the Brothers Grimm. Others are by H. C. Andersen

3

C = L er ikke det 11. bogstav i alfabetet

C = L is not the 11th letter of the alphabet

4

C = Sommer

B = Sun

5

B = 44

LØSNING SOLUTION

6

A = 4:30 Gang time- og minutviser. Resultatet er 36

A = 4:30 Multiply hours and minutes. The result is 36

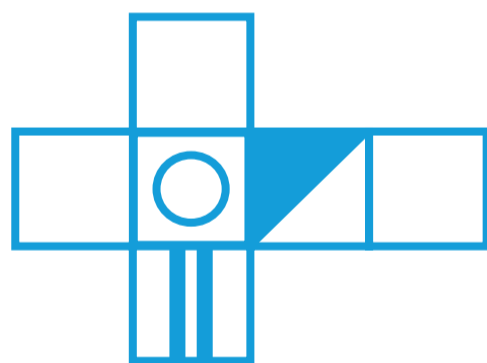
7

C = X - Afstanden mellem bogstaverne er 4, 5, 6 og 7

C = X - The distance between the letters are 4, 5, 6 and 7

8

D



9

B = Vitamin er ikke et grundstof

B = Vitamin is not a chemical element

10

A = Læg mønstret i ventre og midterkolonnen sammen

A = Combine pattern in the left and middle column

LØSNING

SOLUTION

1

D = Han er den eneste med hat

D = He is the only one with hat

2

D = Skrevet af Bdr. Grimm. De øvrige er H. C. Andersen

D = By the Brothers Grimm. Others are by H. C. Andersen

3

C = L er ikke det 11. bogstav i alfabetet

C = L is not the 11th letter of the alphabet

4

C = Sommer

B = Sun

5

B = 44

LØSNING

SOLUTION

6

A = 4:30 Gang time- og minutviser. Resultatet er 36

A = 4:30 Multiply hours and minutes. The result is 36

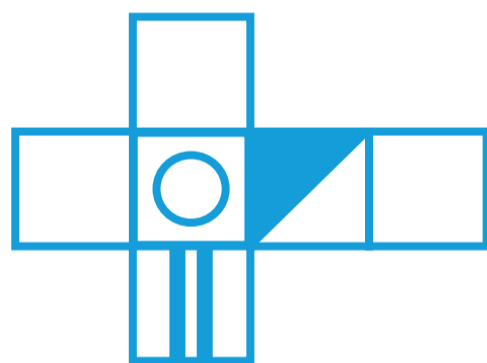
7

C = X - Afstanden mellem bogstaverne er 4, 5, 6 og 7

C = X - The distance between the letters are 4, 5, 6 and 7

8

D



9

B = Vitamin er ikke et grundstof

B = Vitamin is not a chemical element

10

A = Læg mønstret i ventre og midterkolonnen sammen

A = Combine pattern in the left and middle column